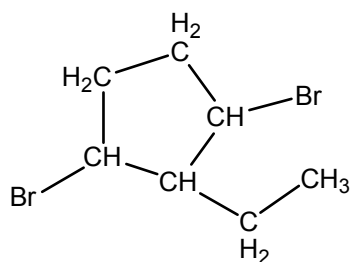


Chemistry 1506R-1 - Fall 2002
 Quiz #2 - 4:00 - 4:50 Section

Name: _____ Social Security Number: _____

1. For each of the following structures or names, give an IUPAC name or draw the correct structure (including all atoms), as required.

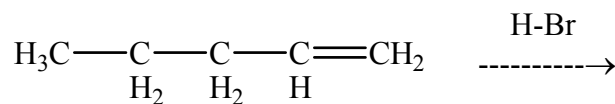
(a)



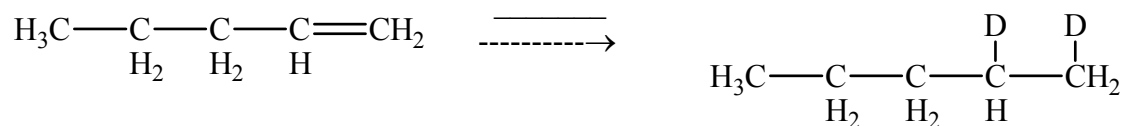
(b) 2,3-dibromo-4-*isobutyl-trans*-2-heptene

2. For each of the following reactions, fill in the correct product (clearly indicating all atoms around the reacting centers).

(a)



(b)

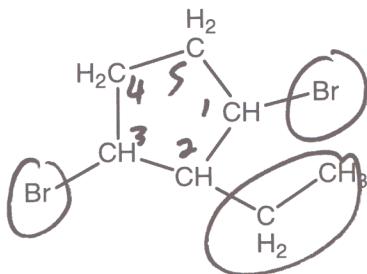


Chemistry 1506R-1 - Fall 2002
Quiz #2 - 4:00 - 4:50 Section

Name: Anguer S Social Security Number: _____

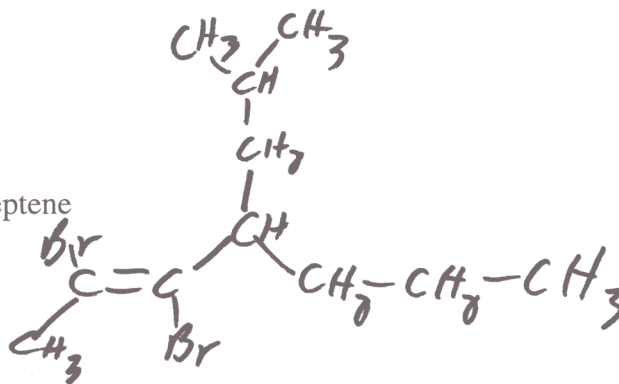
1. For each of the following structures or names, give an IUPAC name or draw the correct structure (including all atoms), as required.

(a)



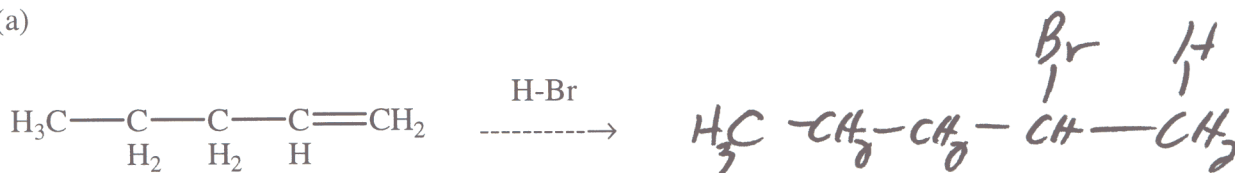
1,3-dibromo-2-ethylcyclopentano

(b) 2,3-dibromo-4-isobutyl-trans-2-heptene



2. For each of the following reactions, fill in the correct product (clearly indicating all atoms around the reacting centers).

(a)



(b)

